

# Canals and Locks in Upper and Lower Canada

## **Cycle 3 Year 1**

Canadian society around 1820

### **Documents Used:**

Maps

### **Intellectual Operations Involved:**

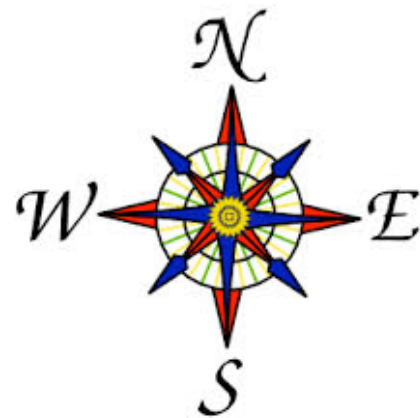
Situate in time and space

Establish facts

Characterize a territory

### **Techniques Specific to Geography & History:**

Interpret simple maps

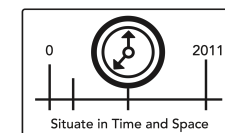


**Competency 1**

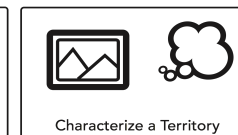
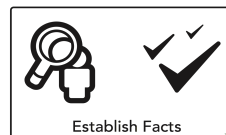
To understand the organization of a society in its territory



# The Canadian Territory Around 1820



**Remember, Toronto  
used to be called  
York**



The first canal systems.



Canada in 1820

Click image for other version.



What does the map on the left represent?

What does the map on the right represent?

Explain why canals and locks were built around 1820.

How many canals were built in Lower and Upper Canada?

Which canal links Ottawa and Kingston and when was it built?

Which canal is further west on the map?

Where is it located, in Lower Canada or in Upper Canada?

What is the purpose of this specific canal?

The Atlantic provinces are not coloured on the map entitled "Le Canada en 1820". What does that mean?

Using the scale, what is the distance between Montreal and Quebec city?