

Cycle 3 Year 2

Life in Inuit Society around 1980

Documents used: Maps and images



Intellectual Operations involved:

Characterizing a Territory

Establishing Facts

Establishing Connections Between Facts

Techniques specific to geography and history:

1. Interprets Simple Maps

2. Interprets Illustrated Documents



Competency 3 Diversity



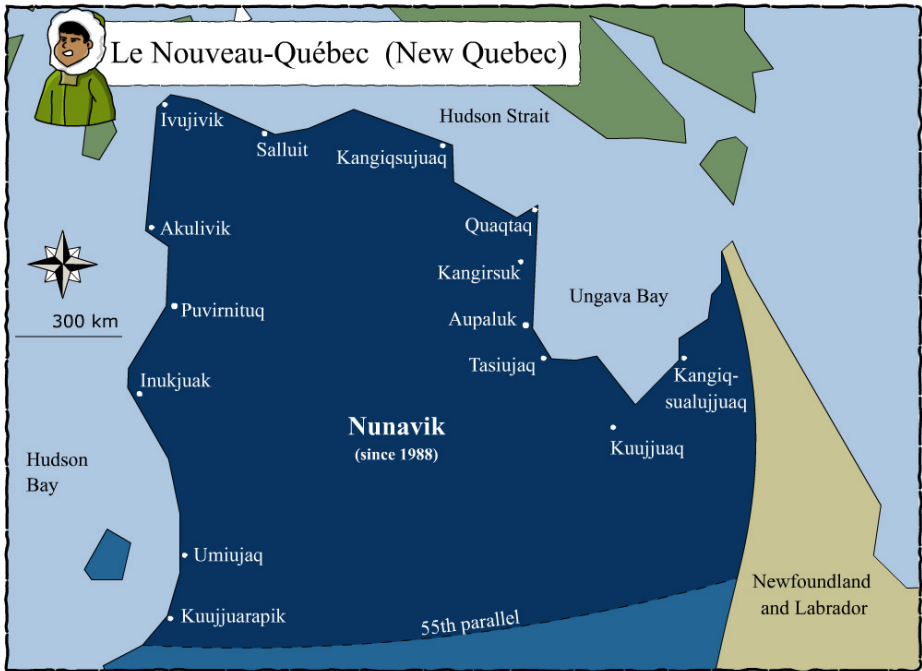
Characterize a Territory



Establish Facts



Establish Connections
Between Facts



New Quebec and Inuit villages © Service national du RÉCIT de l'univers social

What do you notice about the location of the Inuit villages?

What might this information tell you about the diet and transportation of the people in this society?

Lined area for student responses.

Correction Key



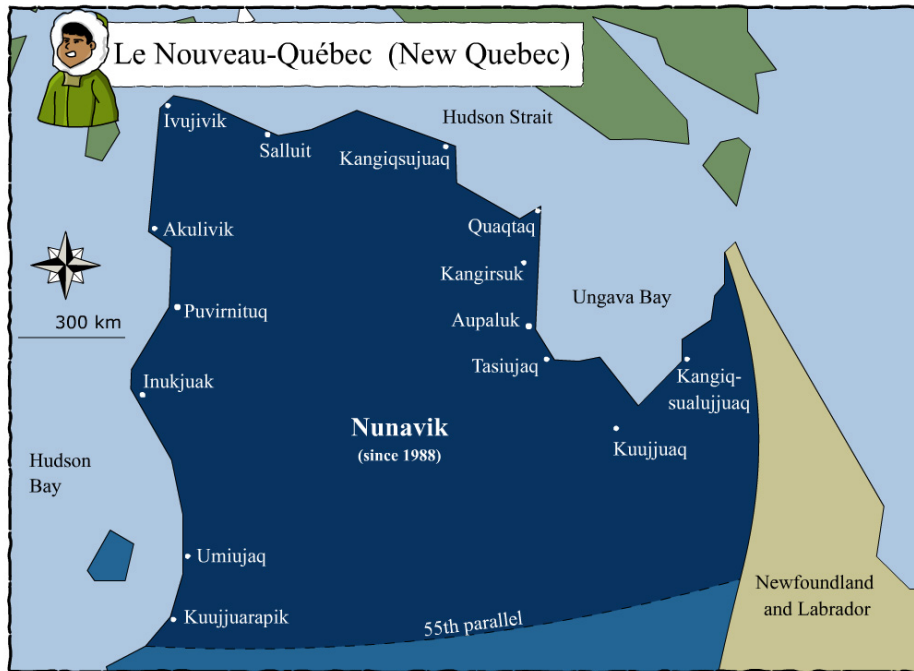
Characterize a Territory



Establish Facts



Establish Connections
Between Facts



What do you notice about the location of the Inuit villages?

They are located on the coast.

What might this information tell you about the diet and transportation of the people in this society?

The people likely travel by water, since the towns are on the coast and not in the interior. That means they have been able to construct boats and likely use them when the weather allows them to. As well, they probably fish, and fish is likely an important part of their diet, both now and traditionally.




Le village de Salluit en hiver © Claudine Simard, la photo est sous licence Creative Commons by-sa-2.5



Characterize a Territory

**Locate this village on the map
by circling the name of the village.**

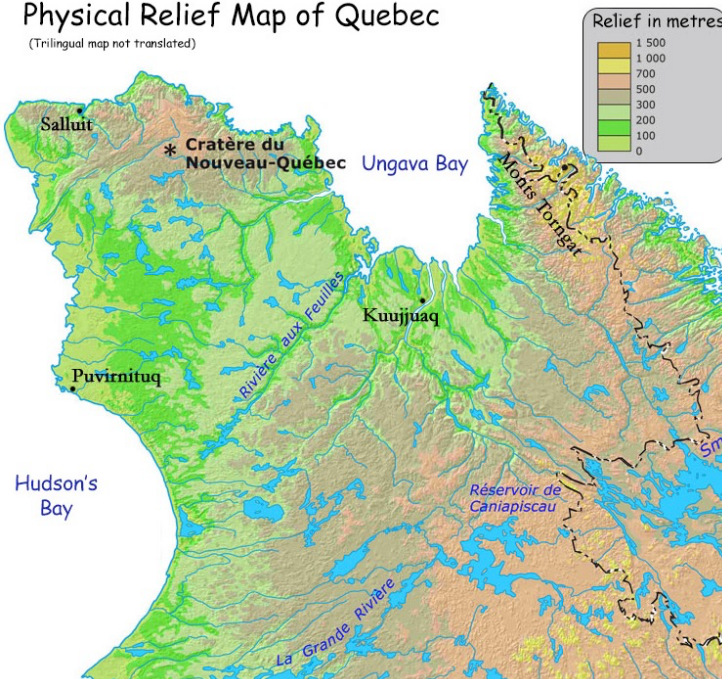


**Mark an arrow on the map
to indicate from
which direction
the photo was taken.**



Physical Relief Map of Quebec

(Trilingual map not translated)



Source : Ressources naturelles Canada, <http://atlas.nrcan.gc.ca/>

Physical Relief Map of Quebec © Service national du RÉCIT de l'univers social et l'Atlas du Canada en ligne



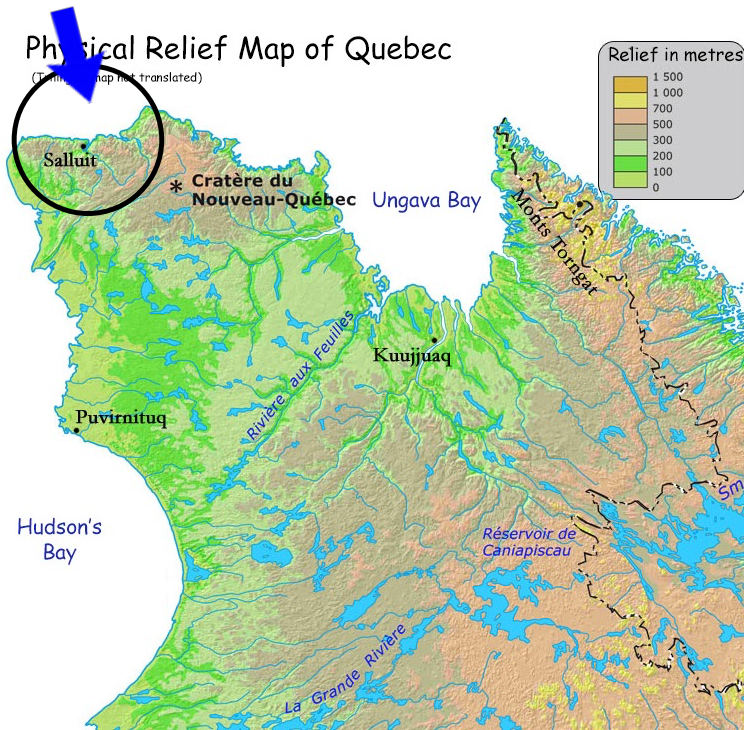
Le village de Salluit en hiver © Claudine Simard, la photo est sous licence Creative Commons by-sa-2.5



Correction Key

Locate this village on the map by circling the name of the village.

Mark an arrow on the map to indicate from which direction the photo was taken.

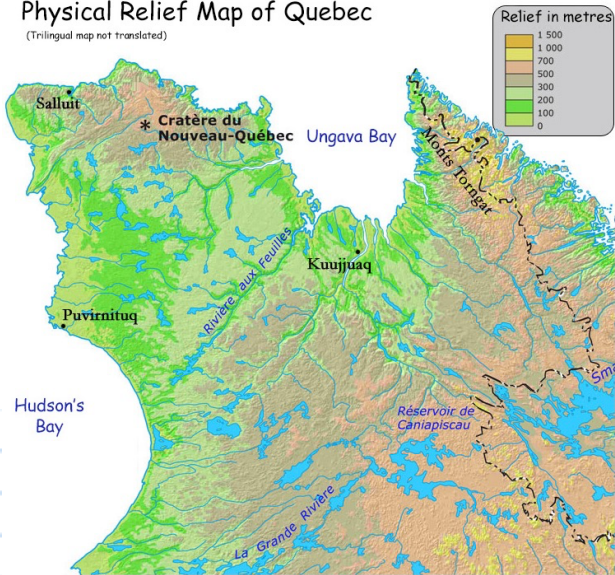


Source : Ressources naturelles Canada, <http://atlas.nrcan.gc.ca/>

Physical Relief Map of Quebec © Service national du RÉCIT de l'univers social et l'Atlas du Canada en ligne

Physical Relief Map of Quebec

(Trilingual map not translated)



Source : Ressources naturelles Canada, <http://atlas.nrcan.gc.ca/>

Physical Relief Map of Quebec © Service national du RÉCIT de l'univers social et l'Atlas du Canada en ligne



Establish Connections
Between Facts



Characterize a Territory

**What do this map
and this photo
tell you about
the geography of
the territory of
northern Quebec?**

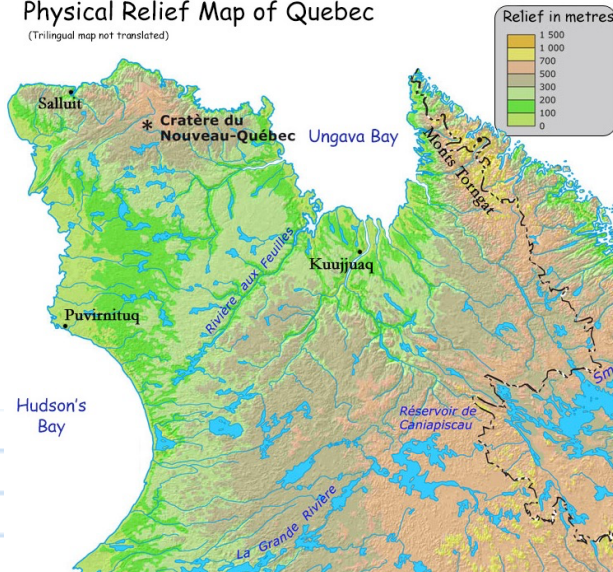


Le village de Salluit en hiver © Claudine Simard, la photo est sous licence Creative Commons by-sa-2.5



Physical Relief Map of Quebec

(Trilingual map not translated)



Source : Ressources naturelles Canada, <http://atlas.nrcan.gc.ca/>

Physical Relief Map of Quebec © Service national du RECIT de l'univers social et l'Atlas du Canada en ligne



Establish Connections
Between Facts



Characterize a Territory


**What do this map
and this photo
tell you about
the geography of
the territory of
northern Quebec?**

The map's legend tells us that the terrain is not very elevated, meaning that there are no mountains and few hills. We can see this in the photo. The village is located in a low spot near the water. The water is important for transportation and for fishing, and fish is an important part of the Inuit diet. We can see that the spot has been chosen because it will protect the villagers from the cold winds as well.



Le village de Salluit en hiver © Claudine Simard, la photo est sous licence Creative Commons by-sa-2.5






Why might this location have been chosen for the site of the village?

What information does this photo give us about the way the Inuit live today?

The Village of Salluit. <http://inuitofmontreal.blogspot.ca/2010/06/nunatsiaqonline-2010-06-15-news.html>

Correction Key

Correction Key



Why might this location have been chosen for the site of the village?

This low flat spot offers shelter from cold winds. There is a river and the ocean near.

What information does this photo give us about the way the Inuit live today?

The Village of Salluit. <http://inuitofmontreal.blogspot.ca/2010/06/nunatsiaqonline-2010-06-15-news.html>

This photo shows us that the people of this territory live in houses, not in igloos or in tents made of animal skins. We can see roads, telephone/electricity poles, we can see bigger community buildings as well, buildings which look like they may be schools, arenas or community centers. Many of the houses resemble each other, and we can see that the same building materials have been used. We can see the town has been planned, since it is laid out on a grid the way newer towns often are.



Un caribou © Claudine Simard, la photo est sous licence Creative Commons by-sa-2.5



The Village of Salluit. <http://inuitofmontreal.blogspot.ca/2010/06/nunatsiaqonline-2010-06-15-news.html>



Describe the vegetation surrounding this town

Correction Key



Un caribou © Claudine Simard, la photo est sous licence Creative Commons by-sa-2.5



The Village of Salluit. <http://inuitofmontreal.blogspot.ca/2010/06/nunatsiaqonline-2010-06-15-news.html>



Describe the vegetation surrounding this town

There is very little vegetation around this town. We can't see any trees or bushes at all, though there are low grasses that the animals must eat and the rocks seems to have vegetation on them, probably mosses and lichens.